


I. Estimate the amount of the shape that is shaded. Give your estimate as both a percentage and a proportion (decimal or fraction).



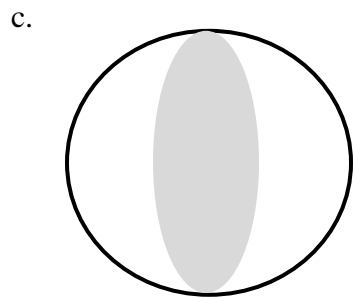
percentage \_\_\_\_\_

proportion \_\_\_\_\_



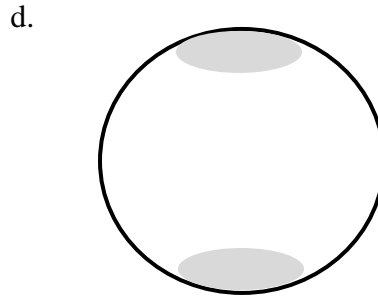
percentage \_\_\_\_\_

proportion \_\_\_\_\_




percentage \_\_\_\_\_

proportion \_\_\_\_\_



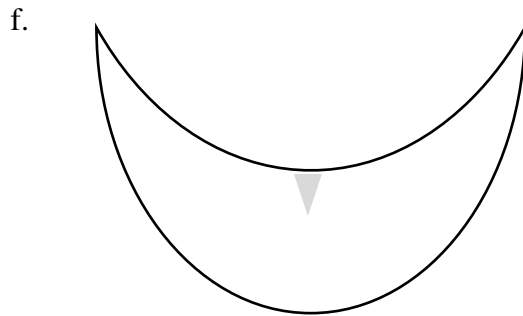
percentage \_\_\_\_\_

proportion \_\_\_\_\_



percentage \_\_\_\_\_

proportion \_\_\_\_\_



percentage \_\_\_\_\_

proportion \_\_\_\_\_